



MATHEMATICS

CH-11 TIME

Name: _____

Date: _____

Class: II Sec: _____

I. Fill in the blanks

- There are _____ months in a year.
- _____ comes after February.
- _____ is the last month of the year.
- _____ is the shortest month of the year.
- There are _____ days in an ordinary year.
- A leap year has _____ days in the month of February.
- Monday, _____, Wednesday
- A leap year has _____ days.
- Independence day falls in the month of _____.
- Children's day falls in the month of _____.
- Republic day is celebrated in the month of _____.
- 5 o'clock is 2 hours _____ than 7 o'clock.
- 9 o'clock is 3 hours _____ than 6 o'clock.

II. Fill in the missing time

- 2 O' clock \rightarrow 2 :00
- 9 O' clock \rightarrow _____
- Half past 5 \rightarrow _____
- Half past 12 \rightarrow _____

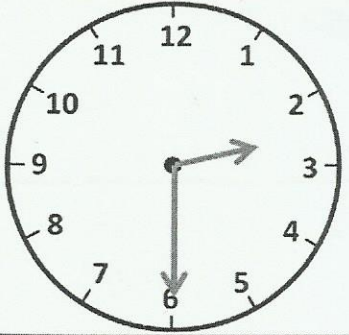
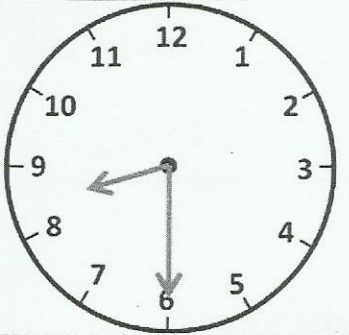
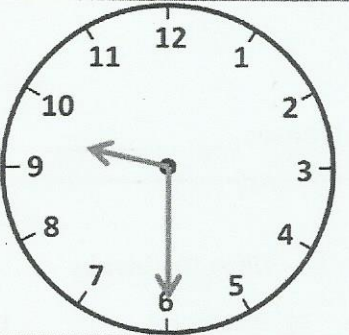
III. Answer the following questions


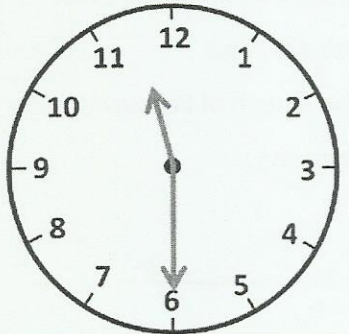
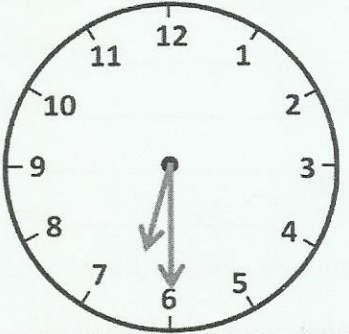
- What is the day 2 days before Sunday? _____
- How many months have 31 days? _____
- Which month comes after July? _____



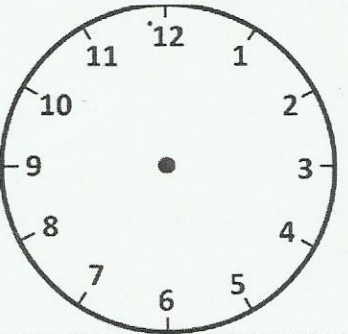
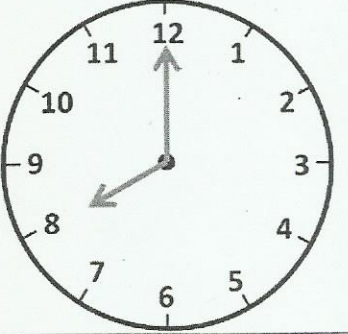
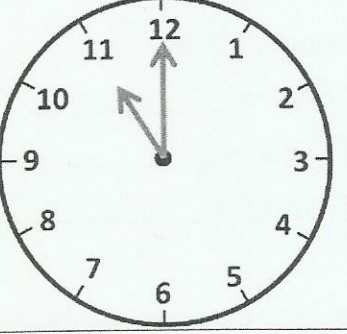
INDIAN SCHOOL NIZWA - WORKSHEET

IV. Write the correct time underneath each clock.

		
Half past 2		

V. For each time, you need to either draw the hands or write the time.

		
3 o'clock	___ o'clock	___ o'clock